


Name _____

Date _____

Mode Identification II

Circle the correct mode (major or minor) for each scale.

1 Major Minor



2 Major Minor




3 Major Minor



4 Major Minor



5 Major Minor



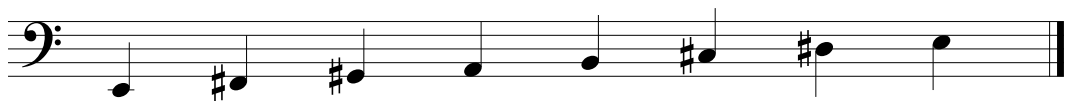
6 Major Minor



7 Major Minor



8 Major Minor



9 Major Minor

